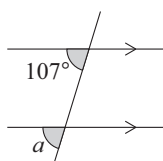


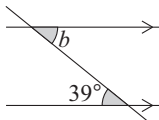
TASK 4.2

Find the angles marked with letters.

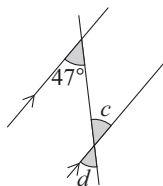
1.



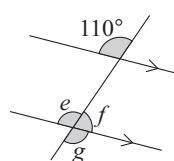
2.



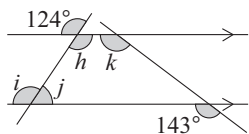
3.



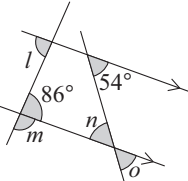
4.



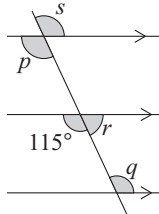
5.



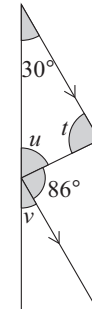
6.



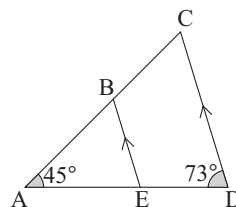
7.



8.



9. a Find the value of angle ABE.
b Give full reasons for your answer.



10. a Find the value of angle SQR.
b Give full reasons for your answer.

