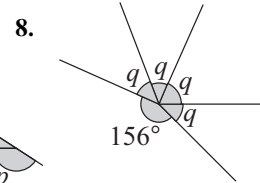
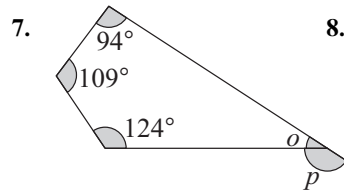
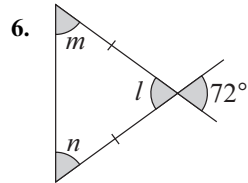
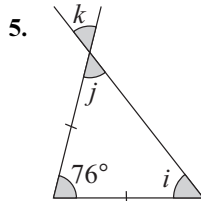
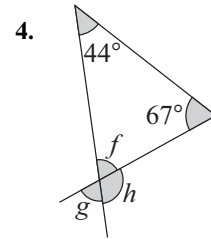
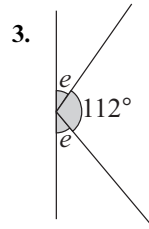
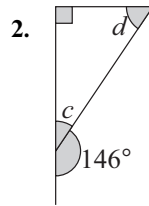
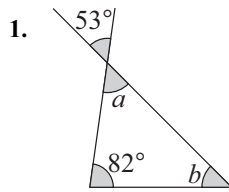
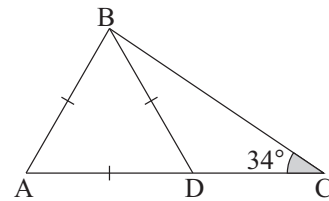


## TASK 4.1

Find the angles marked with letters.



9. a Write down the value of angle ADB.  
 b Give a reason for your answer.  
 c Find the value of angle CBD.  
 d Give full reasons for your answer.



10. a Find the value of angle QPR.  
 b Give full reasons for your answer.

