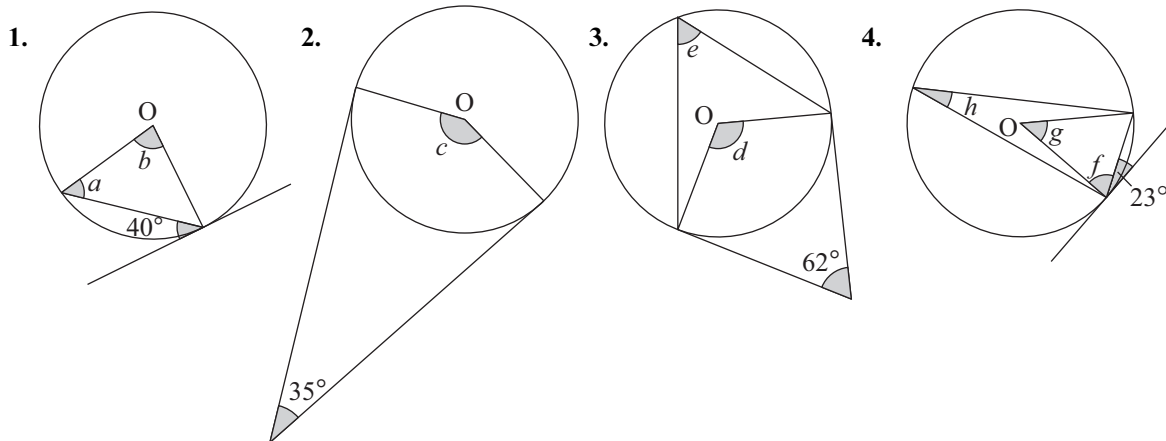


TASK 4.17

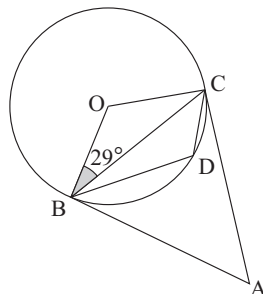
Find the angles marked with letters. (O is the centre of each circle.)



5. In this question, write down *all the reasons* for your answers.

Find

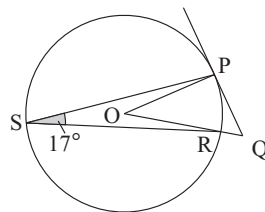
- a angle BOC
- b angle BDC
- c angle CAB



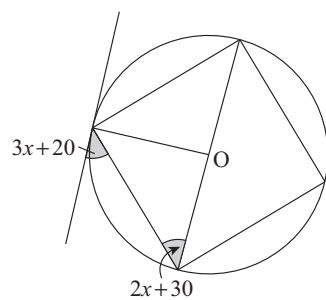
6. In this question, write down *all the reasons* for your answers.

Find

- a angle POR
- b angle PQO

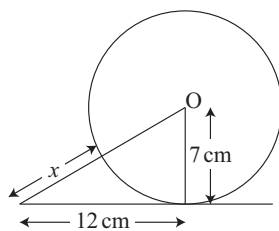


7. Find x



8. In each part of the question below, find x giving each answer to 1 d.p.

a



b

