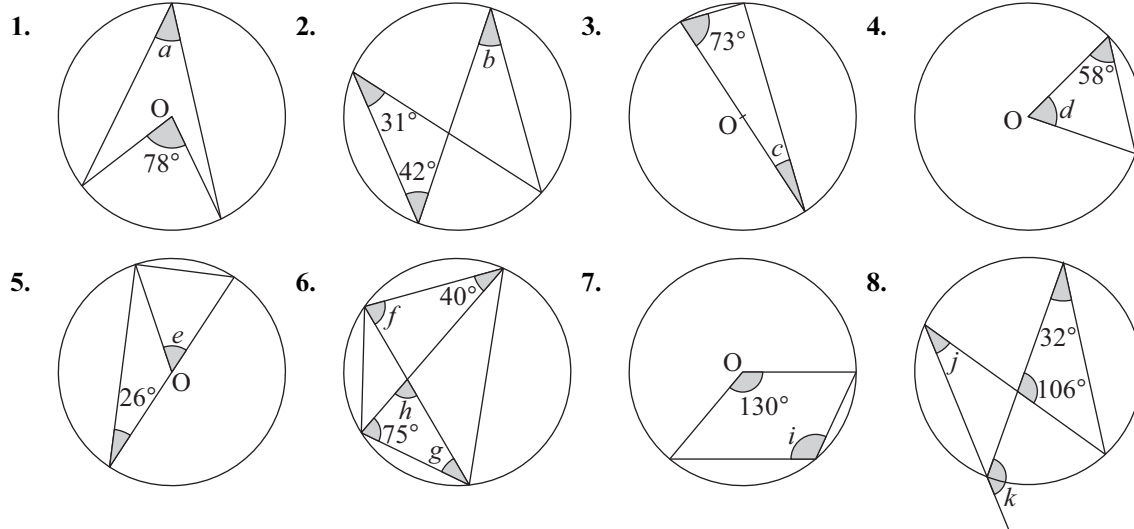


TASK 4.15

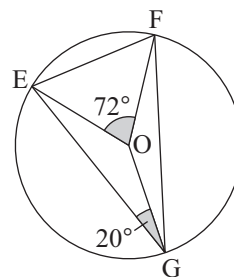
Find the angles marked with letters. (O is the centre of each circle.)



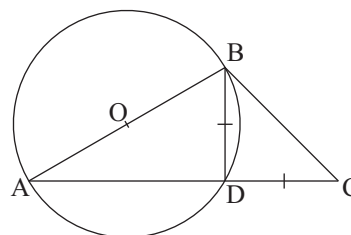
9. In this question, write down *all the reasons* for your answers.

Find

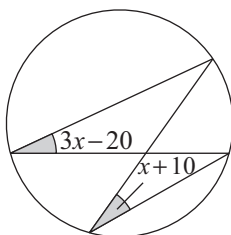
- a angle OEG
- b angle OGF
- c angle OFG
- d angle FEO
- e angle EFG



10. Find angle BCD.
Write down *the reasons* for your answer.



11. Find x .



12. Find y .

