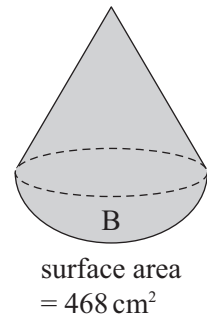
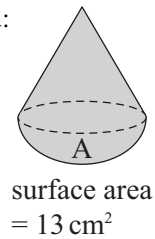


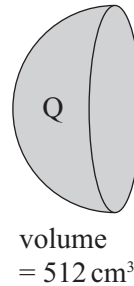
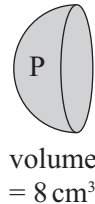
## TASK 4.14

---

1. These two shapes are similar. If the volume of A is  $47 \text{ cm}^3$ , find:
- the area ratio
  - the length ratio
  - the volume ratio
  - the volume of B



2. These two hemispheres are similar. If the surface area of Q is  $912 \text{ cm}^2$ , find
- the volume ratio
  - the length ratio
  - the area ratio
  - the surface area of P



3. Two hexagonal prisms are similar. One has a capacity of  $5.4 \text{ l}$  and the other has a capacity of  $6.9 \text{ l}$ . If the surface area of the smaller one is  $19 \text{ m}^2$ , what is the surface area (to 3 s.f.) of the larger one?
4. A bottle has a surface area of  $480 \text{ cm}^2$  and a volume of  $700 \text{ cm}^3$ . What is the surface area (to 3 s.f.) of a bottle whose volume is  $500 \text{ cm}^3$ ?
5. A towel has a volume of  $6100 \text{ cm}^3$ . The towel shrinks in a tumble drier. It remains a similar shape but its surface area is reduced by 12%. Find the new volume of the towel (to 3 s.f.)
6. Two crystals are similar. Their surface areas are in the ratio 5:9. If the volume of the smaller crystal is  $8.7 \text{ mm}^3$ , find the volume of the larger crystal (to 3 s.f.)
7. Two similar solid statues are made from the same material. The surface area of the larger statue is  $2749 \text{ cm}^2$  and the smaller statue is  $1364 \text{ cm}^2$ . The cost of the material to make the larger statue is \$490. What is the cost of the material to make the smaller statue (to the nearest pence)?