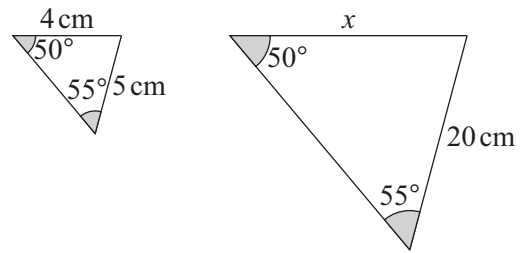
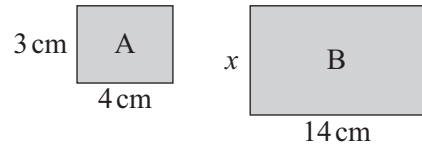


## TASK 4.11

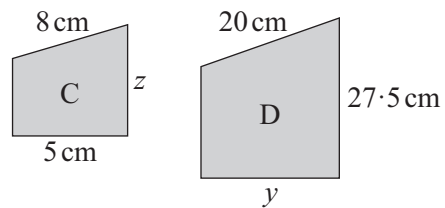
1. a Explain why these triangles are similar.  
b Find  $x$ .



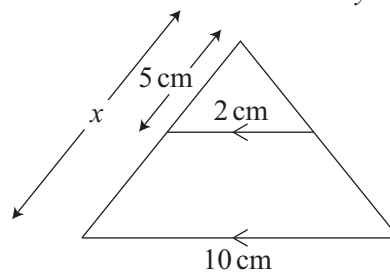
2. Rectangles A and B are similar.  
Find  $x$ .



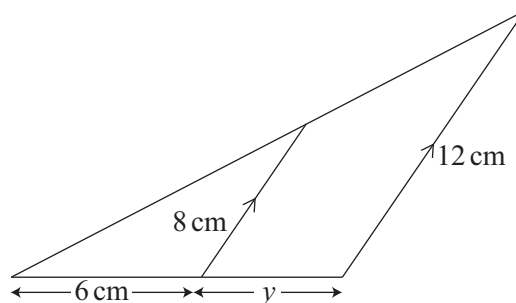
3. Shapes C and D are similar.  
Find  $y$  and  $z$ .



4. Use similar triangles to find  $x$ .



5. Use similar triangles to find  $y$ .



6. Use similar triangles to find  $x$  in each diagram below.

